


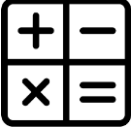
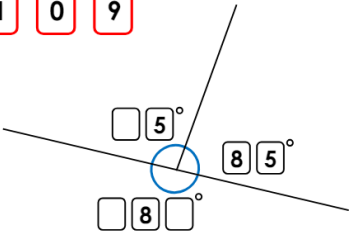
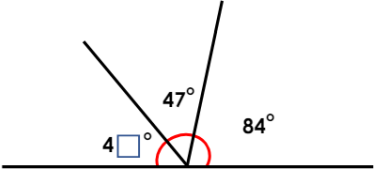



Focus	Activity	Due	Completed
<p><b>Reading</b></p> 	<p>You should be reading at least <b>4 x per week</b> at home.</p> <p>Please remember to <b>record all reading</b> in your reading diaries and get an adult to sign it.</p> <p><b>Extension:</b> Summarise you reading book so far- main characters, what has happened and what you think might happen next</p>		
<p><b>Spelling</b></p> 	<p>Practise your spellings in your homework book. Be ready for a test on <b>Wednesday</b>.</p> <p>This week's spellings follow the pattern: <b>words with &lt;meter&gt; and &lt;metr&gt;</b></p> <p>perimeter, kilometre, diameter, millimetre, thermometer, symmetry, barometer, metronome, chronometer, geometry</p> <p>☆ Challenge – metropolis, accelerometer</p> <p><b>Extension:</b> Using the spellings above, correctly use each one in a sentence. Write these in your homework book.</p>		
<p><b>Times tables</b></p> 	<p>You now have access to Times Table Rockstars (TTRS) with your own login details. Each week we will have a TTRS test based on 1 set of times tables, this week we will be concentrating on:</p> <p>3 and 6 times tables</p> <p><b>Extension:</b> Use TTRS to practise your 3 ad 6 times tables</p>		
<p><b>Maths</b></p> 	<p>1a. Use the digit cards to fill in the missing numbers.</p> <p>1 0 9</p>  <p>5b. One of the angles below has lost a digit. What should the missing digit be?</p> 		
<p><b>English</b></p> 	<p>Using inverted commas, write a conversation between Max and his Uncle Ted. It could be about:</p> <ul style="list-style-type: none"> <li>• Max arriving at Villa Isabell</li> <li>• Max being sent to work at the banana factory</li> <li>• Uncle Ted finding Max in his secret underground room</li> </ul>		