






Focus	Activity	Due	Completed
<p>Reading</p> 	<p>You should be reading at least 4 x per week at home.</p> <p>Please remember to record all reading in your reading diaries and get an adult to sign it.</p> <p>Extension: What are your first impressions of our new book "The Nowhere Emporium" Do you like it? Why/why not? Are you intrigued to read more? Why/Why not?</p>		
<p>Spelling</p> 	<p>Practise your spellings in your homework book. Be ready for a test on Wednesday.</p> <p>This week's spellings follow the pattern: words with <fin></p> <p>finish, define, confine, fitness, refine, finalise, finally, definite, infinite, definition</p> <p>☆ Challenge – definitive, infinitesimal</p> <p>Extension: Using the spellings above, correctly use each one in a sentence. Write these in your homework book.</p>		
<p>Times tables</p> 	<p>You now have access to Times Table Rockstars (TTRS) with your own login details. Each week we will have a TTRS test based on 1 set of times tables, this week we will be concentrating on:</p> <p>3 and 6 times tables and division facts</p> <p>Extension: Use TTRS to practise your 3 and 6 times tables and division facts</p>		
<p>Maths</p> 	<p>5a. Find the missing digits in the calculation below.</p> $ \begin{array}{r} 2 \bullet \blacksquare \quad 0 \quad 7 \\ + \blacksquare \bullet 7 \quad 9 \quad \blacksquare \\ \hline 5 \bullet 3 \quad \blacksquare \quad 9 \end{array} $ <p>4b. Use the digit cards to complete the subtraction calculation.</p> <p>3 0 6 1</p> $ \begin{array}{r} 3 \bullet 4 \square \\ - \square \bullet \square 2 \ 8 \\ \hline 2 \bullet 4 \ 0 \ 2 \end{array} $		
<p>English</p> 	<p>Research task</p> <p>Use the internet to find some interesting facts to go in the "Did you know" or "Answer and Question" section for a Maya encyclopaedia page.</p>		