




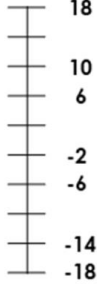



Focus	Activity	Due	Completed
<p>Reading</p> 	<p>You should be reading at least 4 x per week at home.</p> <p>Please remember to record all reading in your reading diaries and get an adult to sign it.</p> <p>Extension: What do you think of the main character in The Nowhere Emporium Daniel Holmes?</p>		
<p>Spelling</p> 	<p>Practise your spellings in your homework book. Be ready for a test on Wednesday.</p> <p>This week's spellings follow the pattern: words with <graph></p> <p>graphic, graphite, grapheme, paragraph, photography, autograph, geography, biography, cartographer, choreograph</p> <p>☆ Challenge – autobiography, cinematography</p> <p>Extension: Using the spellings above, correctly use each one in a sentence. Write these in your homework book.</p>		
<p>Times tables</p> 	<p>You now have access to Times Table Rockstars (TTRS) with your own login details. Each week we will have a TTRS test based on 1 set of times tables, this week we will be concentrating on:</p> <p>6, 7 and 8 times tables</p> <p>Extension: Use TTRS to practise your 6,7 and 8 times tables</p>		
<p>Maths</p> 	<p>6a. Ben had £28 in his bank account. On Tuesday, his phone and broadband bills came out. His bank account is now -£16. If the phone bill was £25, how much was Ben's broadband bill?</p> <p>Use the number line below for support.</p>  <p>1a. Luna is using a number line to count through zero.</p> <p>She says,</p>  <p>From the top of the number line, the missing numbers are 14, 0 and -10.</p> <p>Is she correct? Convince me.</p>		
<p>English</p> 	<p>Write a question and answer section for an encyclopaedia page for the Romans. Use the internet to research information.</p> <p>Remember- adverbial clauses, relative clauses, parenthesis</p>		